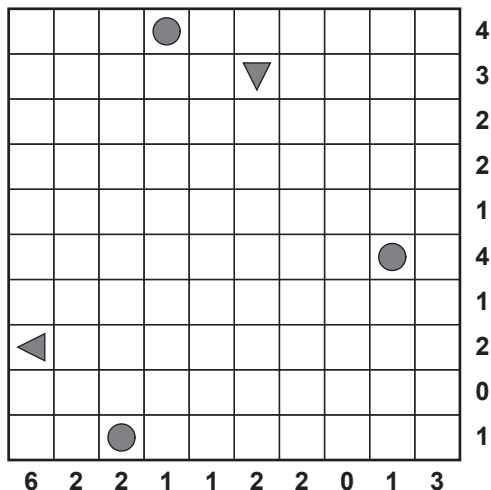



PUZZLES

BEGIN YOUR MISSION

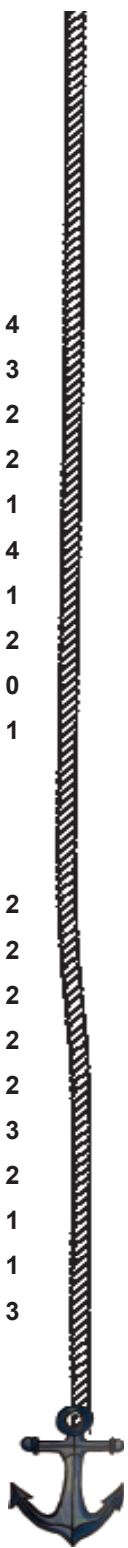
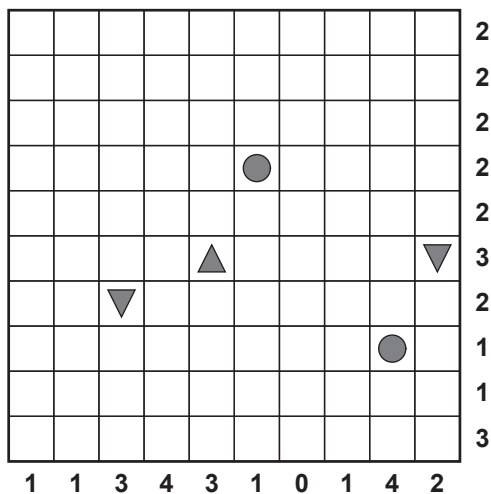

1

Locate the position of each of the ships listed below. Numbers around the edge tell you the number of ship segments in each row and column of the puzzle. Ships are surrounded on all sides by water, including diagonally

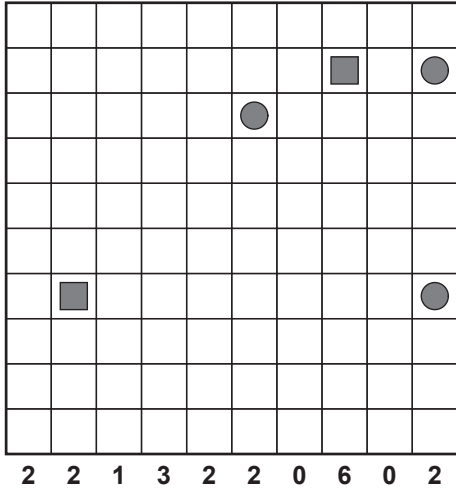


2


Locate the position of each of the ships listed below. Numbers around the edge tell you the number of ship segments in each row and column of the puzzle. Ships are surrounded on all sides by water, including diagonally



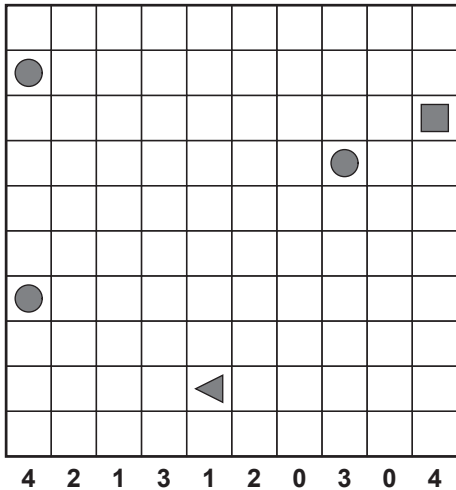
3



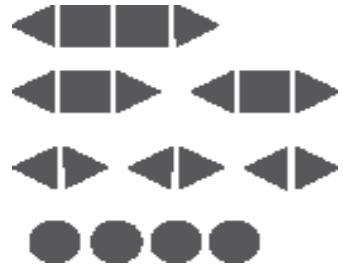
Locate the position of each of the ships listed below. Numbers around the edge tell you the number of ship segments in each row and column of the puzzle. Ships are surrounded on all sides by water, including diagonally




4



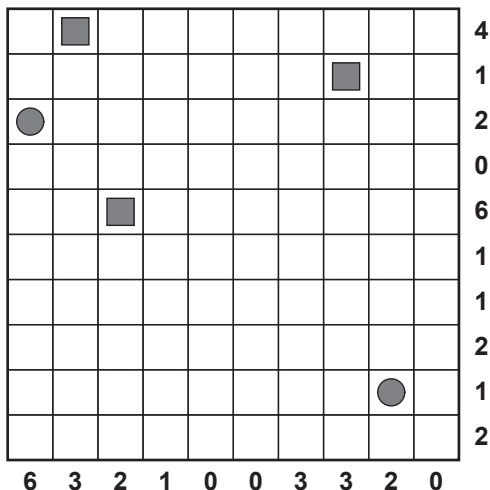
Locate the position of each of the ships listed below. Numbers around the edge tell you the number of ship segments in each row and column of the puzzle. Ships are surrounded on all sides by water, including diagonally




Locate the position of each of the ships listed below. Numbers around the edge tell you the number of ship segments in each row and column of the puzzle. Ships are surrounded on all sides by water, including diagonally



5



Locate the position of each of the ships listed below. Numbers around the edge tell you the number of ship segments in each row and column of the puzzle. Ships are surrounded on all sides by water, including diagonally



6

